


29/08/xx

Class-VI (MATHS)

K. Konhaiya

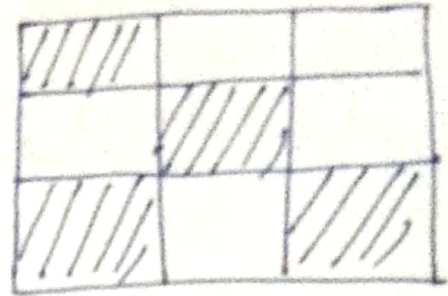
⇒ Colour the part according to given fraction:

(1)



$$\frac{1}{6}$$

(2)



$$\frac{4}{9}$$


Do yourself :

3)



$$\frac{3}{4}$$

4)



$$\frac{1}{3}$$

5) What fraction of a day is 8 h ?

Ans → $\frac{8}{24} = \frac{1}{3}$

6) What fraction of an hour is 40 minute ?

7) What fraction of a week is 28 days.