

VIDYA BHAWAN BALIKA VIDYA PITH

CLASS- 1

DATE – 16. 08.21

SUB – MATHS

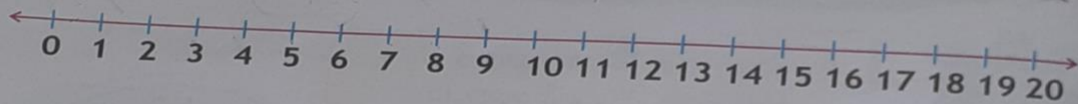
S.T -PRAGYA

BASED ON N.C.E.R.T PATTERN


CH – DIVISION

Complete the following divisions using the number line and write the answer in the boxes.


(a) $9 \div 3 = 3$




(b) $10 \div 2 = \square$



(c) $12 \div 3 = \square$



(d) $10 \div 5 = \square$



e) $14 \div 2 = \square$

