

VIDYA BHAWAN BALIKA VIDYA PITH

CLASS –2

DATE – 02. 10. 21

SUB- MATHS


C. T – PRAGYA


BASED ON N.C.E.R.T PATTERN


REVISION


GEOMETRICAL SHAPES AND PATTERN

- Tick the correct answer.

a  Cube
 Sphere

b  Cone
 Cuboid

c  Cube
 Cuboid

d  Oval
 Sphere

- Name two objects which resemble each of

These shapes.

a cuboid	i	ii
b cube	i	ii
c cylinder	i	ii
d sphere	i	ii
e cone	i	ii
