

VIDYA BHAWAN BALIKA VIDYA PITH

CLASS- 2

DATE – 11. 08.21




SUB – MATHS

S.T -PRAGYA

BASED ON N.C.E.R.T PATTERN



CH – GEOMETRICAL SHAPES AND PATTERNS

1. Count the number of horizontal, Vertical And Slanting lines in the given figures.


		
Horizontal line <input type="text"/>	Horizontal line <input type="text"/>	Horizontal line <input type="text"/>
Vertical line <input type="text"/>	Vertical line <input type="text"/>	Vertical line <input type="text"/>
Slanting line <input type="text"/>	Slanting line <input type="text"/>	Slanting line <input type="text"/>

3. Draw the figures by moving your pencil first on the dotted lines and then using free hand.


a



b



c



d

