

VIDYA BHAWAN BALIKA VIDYAPEETH

CLASS-2

SUBJECT-MATHEMATICS

DATE-30-12-2020






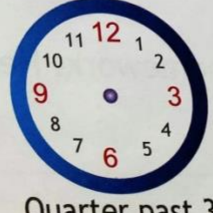


BY-KIRTI KUMARI

BASED ON NCERT PATTERN

Chapter-10,Time

PAGE NO.-165

2. Draw the two hands on the clocks to show the time. Then, write the time below the clock. One has been done for you.

 <p>Quarter past 5 <u>5:15</u></p>	 <p>Quarter past 1 _____</p>	 <p>Quarter past 11 _____</p>	 <p>Quarter past 9 _____</p>
 <p>Quarter past 10 _____</p>	 <p>Quarter past 3 _____</p>	 <p>Quarter past 7 _____</p>	 <p>Quarter past 4 _____</p>