

VIDYA BHAWAN BALIKA VIDYA PITH

CLASS – 3A+B

DATE – 31.08.20

SUB – MATHS

S.T – PRAGYA

BASED ON N.C.E.R.T PATTERN

REVISION

Number Place value Face value

3 8 6

9 2 9

6 2 3

9 2 6

4 0 2 0

4 2 2 6

2 6 4 6

8 2 0 0

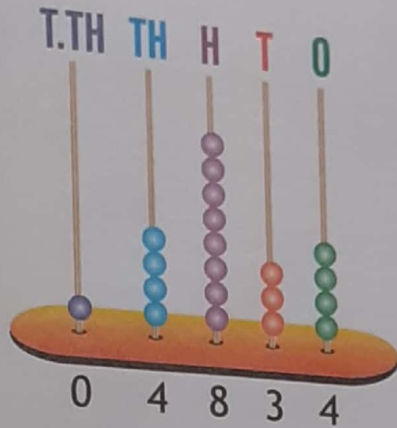

4 4 2 6

5 8 8 6




VII. REPRESENTATION OF NUMBERS USING ABACUS

An abacus, called the counting machine can be used to work out all kinds of counting problems.




$$24 = 20 + 4 = 2 \text{ ten plus } 4 \text{ units}$$



Exercise

1. Draw bead for the given numbers.




a 4972




b 5856



c 6519



d 2836



e 802