



VIDYA BHAWAN, BALIKA VIDYAPITH

Shakti Utthan Ashram, Lakhisarai-811311(Bihar)

(Affiliated to CBSE up to +2 Level)

CLASS:7TH

DATE: 29-12-2020

SUB.: MATHEMATICS

Symmetry

MCQs Questions

Question 1.How many lines of symmetry are there in an equilateral triangle?

- (a) 1 (b) 2 (c) 3 (d) 4

Question 2.How many lines of symmetry are there in a square?

- (a) 1 (b) 2 (c) 3 (d) 4

Question 3.How many lines of symmetry are there in a rectangle?

- (a) 1 (b) 2 (c) 3 (d) 4

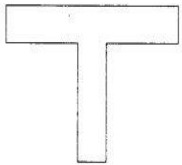
Question 4.How many lines of symmetry are there in a regular pentagon?

- (a) 1 (b) 2 (c) 3 (d) 5

Question 5.How many lines of symmetry are there in a regular hexagon?

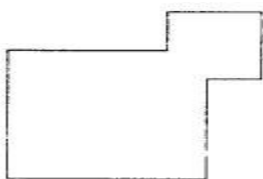
- (a) 2 (b) 4 (c) 6 (d) 3

Question 6.How many lines of symmetry are there in the following figure?



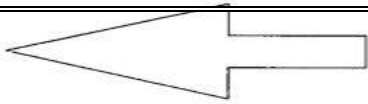
- (a) 1 (b) 2 (c) 3 (d) 4

Question 7.How many lines of symmetry are there in the following figure?



- (a) 1 (b) 2 (c) 3 (d) 4

8.How many lines of symmetry are there in the following figure?



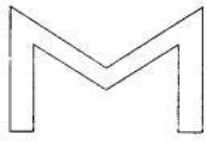
(a) 1

(b) 2

(c) 3

(d) 4

Question 9. How many lines of symmetry are there in the following figure?



(a) 4

(b) 3

(c) 2

(d) 1

Question 10. How many lines of symmetry are there in the following figure?



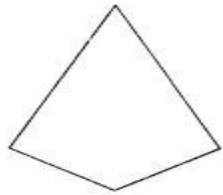
(a) 2

(b) 1

(c) 4

(d) 3

Question 11. How many lines of symmetry are there in following figure?



(a) 1

(b) 2

(c) 3

(d) None of these