

BVP lakhisarai

Subject-Math's

St\_Lalan kumar








Class-6th

Date\_11/12/21

\* Data Handling

Question 1.

In a village six fruit merchants sold the following number of fruit baskets in a particular season:













































Name of fruit Merchants	Number of fruit baskets	 = 100 fruit baskets
Rahim		
Lakhanpal		
Anwar		
Martin		
Ranjit Singh		
Joseph		

Observe this pictograph and answer the following questions:

- (a) Which merchant sold the maximum number of baskets?
- (b) How many fruit baskets were sold by Anwar?
- (c) The merchants who have sold 600 or more number of baskets are planning to buy a godown for the next season. Can you name them?

## Question 2.

The sale of electric bulbs on different days of a week is shown below:

Days	Number of Electric bulbs	 = 2 bulbs
Monday	     	
Tuesday	       	
Wednesday	   	
Thursday	    	
Friday	      	
Saturday	   	
Sunday	        	

Observe the pictograph and answer the following questions:

- (a) How many bulbs were sold on Friday?
- (b) On which day were the maximum number of bulbs sold?
- (c) On which of the days same number of bulbs were sold?
- (d) On which of the days minimum number of bulbs were sold?
- (e) If one big carton can hold 9 bulbs. How many cartons were needed in the given week?